

Year 3 Autumn 2 Maths Activity Mat 3

Section 1

Match up the answers.

$135 + 1$

112

$204 + 1$

611

$111 + 1$

136

$610 + 1$

205

Section 2

Circle the numbers in the 4 times table.

20

9

12

15

8

24

Section 3

How many days in a week?

How many months in a year?

Section 4

Write am or pm beside these 24-hour times:

16:00 →

08:00 →

17:00 →

01:00 →

Section 5

There are 32 chocolates in a box. 18 are milk chocolate. 12 have a hard centre.

How many are not milk chocolate?

Section 6

What would the new time be if the hour hand made a half turn from 3 o'clock?

Section 7

I have £2 in my purse.

I buy a drink and an apple for £1.20.

How much money do I have left?

Section 8

Start at $\frac{5}{10}$.

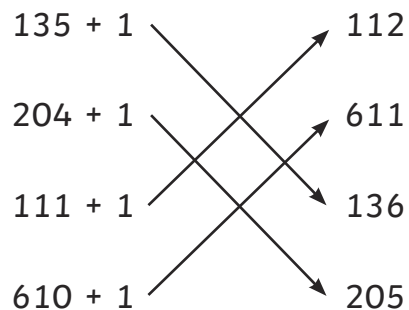
Count on $\frac{3}{10}$.

What is the last tenth you reach?

Year 3 Autumn 2 Maths Activity Mat 3 **Answers**

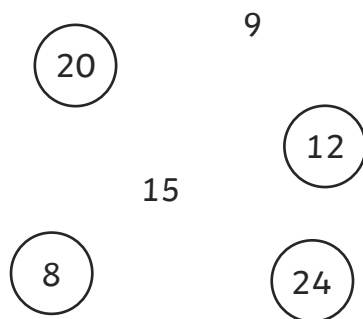
Section 1

Match up the answers.



Section 2

Circle the numbers in the 4 times table.



Section 3

How many days in a week?

7

How many months in a year?

12

Section 4

Write am or pm beside these 24-hour times:

16:00 → pm

08:00 → am

17:00 → pm

01:00 → am

Section 5

There are 32 chocolates in a box. 18 are milk chocolate. 12 have a hard centre.

How many are not milk chocolate?

14

Section 6

What would the new time be if the hour hand made a half turn from 3 o'clock?

9 o'clock or 9:00

Section 7

I have £2 in my purse.

I buy a drink and an apple for £1.20.

How much money do I have left?

80p

Section 8

Start at $\frac{5}{10}$.

Count on $\frac{3}{10}$.

What is the last tenth you reach?

$\frac{8}{10}$

Year 3 Autumn 2 Maths Activity Mat 3

Section 1

Match up the answers.

$148 + 10$ 301

$230 + 100$ 158

$291 + 10$ 330

$188 + 100$ 288

Section 2

Circle the numbers in the 4 times table.

64 32
40 25 20
12 16

Section 3

How many seconds in 1 minute?

How many days in a normal year?

Section 4

Write am or pm beside these 24-hour times:

13:25 →

09:30 →

15:15 →

18:20 →

Section 5

There are 100 marbles in a jar. 28 are red. 17 are green. How many marbles are not red or green?

Section 6

What would the new time be if the hour hand turns a $\frac{3}{4}$ turn from 8 o'clock?

Section 7

Cassie has £3.50 in her purse.

She buys:

2 peaches at 30p each, a sandwich for £1.25 and a drink for 40p. How much money will she have left?

Section 8

Start at $\frac{7}{10}$.

Count on $\frac{3}{10}$.

What is the last tenth you reach?

Year 3 Autumn 2 Maths Activity Mat 3 **Answers**

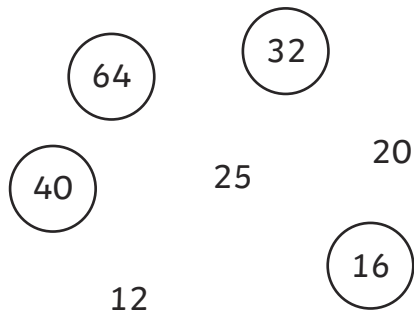
Section 1

Match up the answers.

$148 + 10$	\nearrow	301
$230 + 100$	\searrow	158
$291 + 10$	\searrow	330
$188 + 100$	\longrightarrow	288

Section 2

Circle the numbers in the 4 times table.



Section 3

How many seconds in 1 minute?

60

How many days in a normal year?

365

Section 4

Write am or pm beside these 24-hour times:

13:25 \longrightarrow pm

09:30 \longrightarrow am

15:15 \longrightarrow pm

18:20 \longrightarrow pm

Section 5

There are 100 marbles in a jar. 28 are red. 17 are green. How many marbles are not red or green?

55

Section 6

What would the new time be if the hour hand turns a $\frac{3}{4}$ turn from 8 o'clock?

5 o'clock or 5:00

Section 7

Cassie has £3.50 in her purse.

She buys:

2 peaches at 30p each, a sandwich for £1.25 and a drink for 40p. How much money will she have left?

£1.25

Section 8

Start at $\frac{7}{10}$.

Count on $\frac{3}{10}$.

What is the last tenth you reach?

$\frac{4}{10}$

Year 3 Autumn 2 Maths Activity Mat 3

Section 1

Match up the answers.

$361 + 100$

591

$211 + 10$

203

$491 + 100$

461

$193 + 10$

221

Section 2

Circle the numbers in the 4 and 8 times tables.

36 12
 24
32 40
 64
45 55 16

Section 3

How many weeks are 28 days?

How many months are in $1\frac{1}{2}$ years?

Section 4

Write these 24-hour times in words.

13:20 →

19:00 →

16:45 →

08:40 →

Section 5

Mick buys 3 apples and a banana for 70p. Apples cost 15p. What does the banana cost?

Section 6

What would the new time be if the hour hand turns:

a $\frac{3}{4}$ turn from 4 o'clock:

a half turn from 1 o'clock:

Section 7

A pack of 12 tins of cat food costs £4.25.

The pet shop has a deal of buy 2 packs, get the third free.

How much will this deal cost, and how many tins of cat food would you get?

Section 8

Counting on in tenths, I have reached 1.

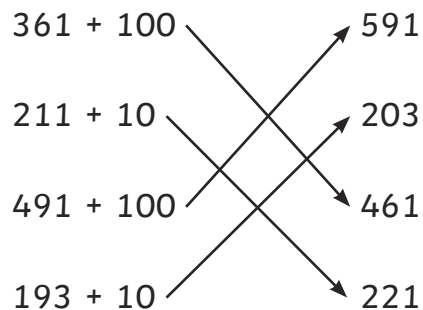
I counted on $\frac{9}{10}$.

How many tenths did I start counting from?

Year 3 Autumn 2 Maths Activity Mat 3 **Answers**

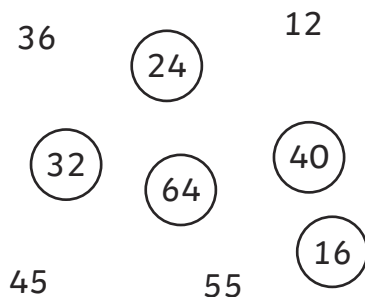
Section 1

Match up the answers.



Section 2

Circle the numbers in the 4 and 8 times tables.



Section 3

How many weeks are 28 days?

4

How many months are in $1\frac{1}{2}$ years?

18

Section 4

Write these 24-hour times in words.

13:20 → twenty past one

19:00 → seven o'clock

16:45 → quarter to five

08:40 → twenty to nine

Section 5

Mick buys 3 apples and a banana for 70p. Apples cost 15p. What does the banana cost?

25p

Section 6

What would the new time be if the hour hand turns:

a $\frac{3}{4}$ turn from 4 o'clock:

1 o'clock or 1:00

a half turn from 1 o'clock:

7 o'clock or 7:00

Section 7

A pack of 12 tins of cat food costs £4.25.

The pet shop has a deal of buy 2 packs, get the third free.

How much will this deal cost, and how many tins of cat food would you get?

£8.50 and 36 tins

Section 8

Counting on in tenths, I have reached 1.

I counted on $\frac{9}{10}$.

How many tenths did I start counting from?

$\frac{1}{10}$